

Second Grade Fourth Nine Week Study Guide

1. Laurie has 312 red fish. Sam has 229 blue fish. How many fish do they have in total?

- A. 117 B. 541 C. 83 D. 531

2. Maria played two games. She scored seventy-two points in the second game. She scored ninety-six points at the end of both games. How many points did Shawna score in the first game?

- A. 4 B. 168 C. 170 D. 24

3. A librarian had 28 books. She sold 19 of them. Then she bought 32 more. How many books does she have now?

- A. 11 B. 41 C. 79 D. 15

4. Phil had shapes in a bag. He put sixty-three more shapes in his bag. Now his bag has one hundred twenty-two shapes in it. How shapes did David have to start with?

Which number sentence shows how to solve the problem?

- A. $___ + 39 = 122$ B. $122 + 63 = ___$ C. $___ - 63 = 122$ D. $___ + 62 = 122$

5. Frank bought fifty-six bottles of soda at the store. Now he has ninety-two bottles of soda. How many bottles of soda did he have before he went to the store?

- A. 148 B. 44 C. 113 D. 36

6. For the school bake sale, Sonia made cookies. She baked 82 chocolate cookies and 29 sugar cookies. After the sale she took 26 cookies home. How many cookies did she sell at the bake sale?

- A. 137 B. 53 C. 85 D. 125

7. Jillian's mom gave her money for her birthday. She also got \$25 dollars from her grandparents for her birthday. Now she has \$60 dollars. Which number sentence shows how much Jillian's mom gave her?

- A. $\$ 60 + \$ 25 = ___$ B. $\$ 25 + \$ 60 = ___$ C. $\$ ___ + \$ 25 = 60$ D. $\$ 60 - \$ 25 = ___$

8. There are 32 fewer blue birds than red birds in the garden. There are 54 blue birds. How many red birds are there?

- A. 24 B. 86 C. 22 D. 68

9. Elliott earned money for walking dogs on Saturday. He earned \$35 dollars for walking dogs on Sunday. Now he has \$63 dollars from both days. How much did he earn for walking the dogs on Saturday?

Which number sentences shows how to solve this problem?

- A. $___ - \$ 35 = \$ 63$ B. $___ + \$ 35 = \$ 63$ C. $\$ 25 + ___ = \$ 63$ D. $\$ 35 + \$ 63 = ___$

15. What is 236 written in expanded form?

- A. 2,000 + 300 + 60 B. 30 + 6 + 200 C. 6 + 30 + 20 D. 200 + 300 + 6

16. Maddie writes a number with 60 tens and 4 ones. What is that number in standard form?

- A. 64 B. 28 C. 604 D. 6004

NBT.4

17. Compare these two numbers. Which symbol goes on the line?

30 tens 8 ones _____ $8 + 300$

- A. < B. > C. = D. +

18. Compare these two numbers. Which symbol goes on the line?

$2 + 5 + 600$ _____ $20 + 500 + 6$

- A. < B. > C. = D. +

NBT.6

19. Sue has the following number of birds in her collection.

Birds	Bird Collection
Blue Birds	26
Red Birds	32
Green Birds	64
Yellow Birds	72

How many birds does Sue have in her collection?

- A. 168 B. 194 C. 152 D. 120

NBT.8

20. Alli had 265 apples. Marc has ten more apples. How many apples does Marc have?

- A. 365 B. 165 C. 255 D. 275

G.1

21. Tamika drew a closed shape with six sides.

What is the name of Tamika's shape?

- A. hexagon B. pentagon C. rectangle D. triangle

22. How are a square and a trapezoid alike?

- A. Both shapes have 3 sides. C. Both shapes have 6 sides.
B. Both shapes have 5 sides. D. Both shapes have 4 sides

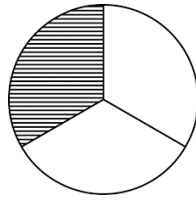
23. Mrs. Berry drew a shape with four sides and four angles. Which shape did she draw?

- A. a circle B. a hexagon C. an octagon D. a rhombus

24. Which shape has one more side than a pentagon
A. hexagon B. square C. pentagon D. octagon


G.3

25. Which fraction does the shaded part show?



- A. $\frac{1}{3}$ B. $\frac{3}{4}$ C. $\frac{1}{4}$ D. $\frac{3}{1}$

26. Mary drew a shape and partitioned it.



What word describes the number of pieces this shape is partitioned into?

- A. halves B. thirds C. fourths D. seconds

G.4

27. Sam has the following coins. How much money does he have?



- A. 91 cents B. 31 cents C. 17 cents D. 71 cents

MD.1

28. About how long is this pencil?

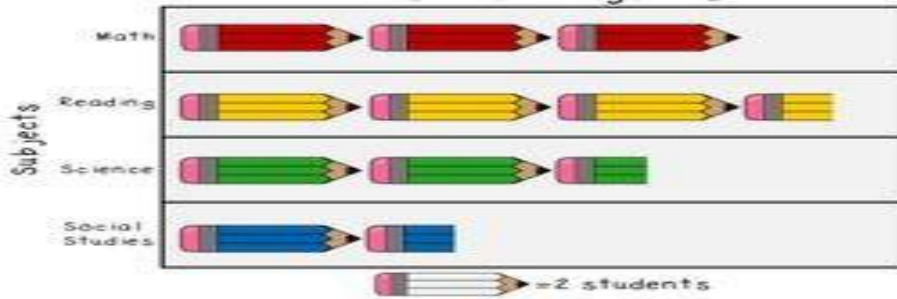


- A. 2 inches B. 1 inch C. 1 1/2 inches D. 3 1/2 inches

MD.10

Picture Graph

Favorite Subjects



29. How many students like math and social studies altogether?

- A. 4 1/2 B. 5 C. 9 D. 10

30. How many more students like reading than social studies?

- A. 4 B. 9 C. 5 D. 10

31. What is true about the graph?

- A. More students like social studies than science.
B. The same number of students like reading and science.
C. Two more students like science than social studies.
D. More students like math than reading.

MD. 7

32. What time is shown on the clock?



- A. a quarter past twelve B. one -thirty C. twelve -thirty D. six-o'clock

33. What time is shown on the clock?



- A. 10:00 B. 1:50 C. 10:10 D. 1:55

Answers:

1. B	2. D	3. B	4. D	5. D
6. C	7. C	8. C	9. B	10. A
11. B	12. B	13. C	14. A	15. B
16. C	17. C	18. B	19. B	20. D
21. A	22. D	23. D	24. A	25. A
26. B	27. D	28. C	29. C	30. A
31. C	32. B	33. C		